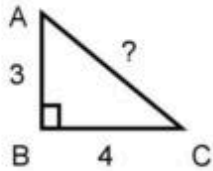


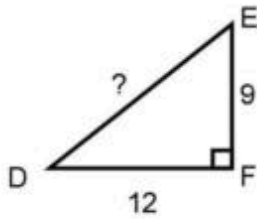
Name: \_\_\_\_\_

### Pythagorean Theorem Worksheet

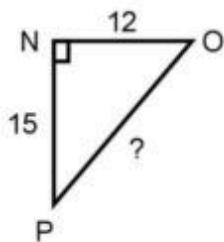
1. What is the missing side length of  $\triangle ABC$ ?



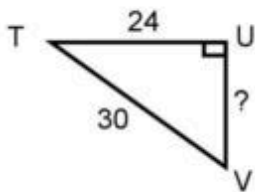
2. What is the missing side length of  $\triangle DEF$ ?



3. What is the missing length of  $\triangle MNO$ ?



4. What is the missing side length of  $\triangle TUV$ ?



5. What is the miss side length of  $\triangle XYZ$ ?

