
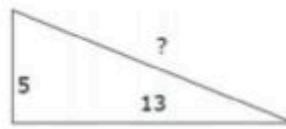


Beginner Pythagorean Theorem Worksheet

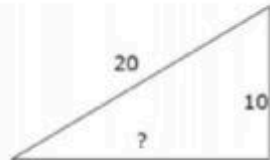
1.



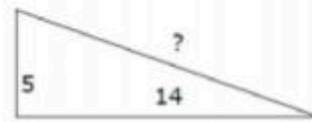
2.



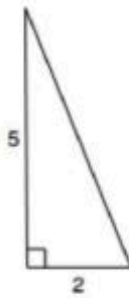
3.



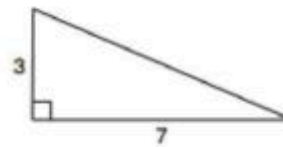
4.



5.



6.



If c is the hypotenuse of the right triangle ABC , find the missing side length. Write your answer in simplest radical form. No decimals.

7. $a = 12, b = 5$

8. $a = 8, c = 10$

9. $b = 2, c = 4$