

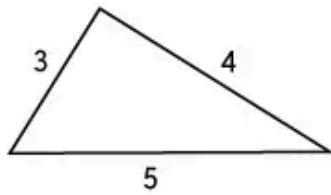
Pythagorean Theorem

Worksheet

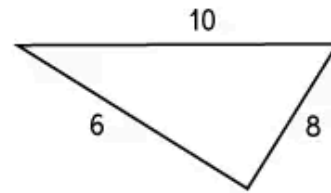
Pythagorean Theorem

1 Do the following lengths form a right triangle? Write 'Yes' or 'No'.

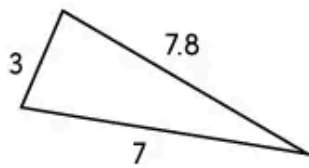
a)



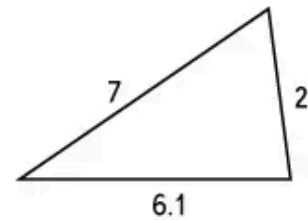
b)



c)

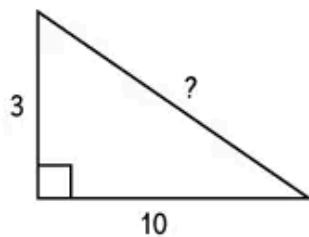


d)

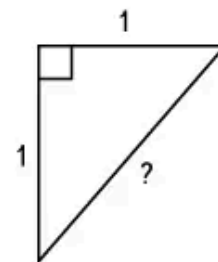


2 Find the missing length of each right triangle.

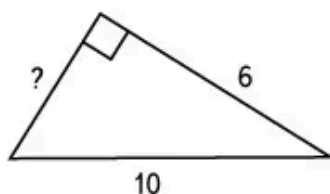
a)



b)



c)



d)

