

Name : _____

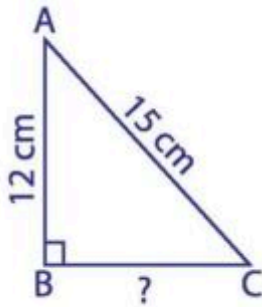
Score : _____

Pythagorean Theorem

Sheet 1

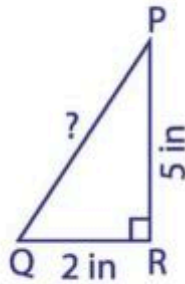
Determine the missing length in each right triangle using the Pythagorean theorem. Round the answer to the nearest tenth.

1)



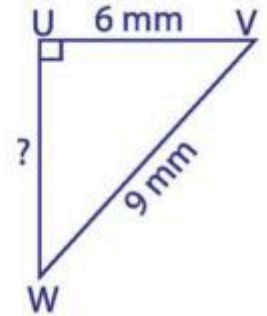
BC = _____

2)



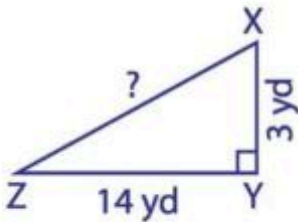
PQ = _____

3)



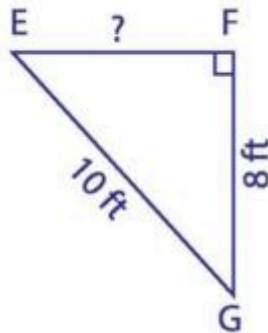
UW = _____

4)



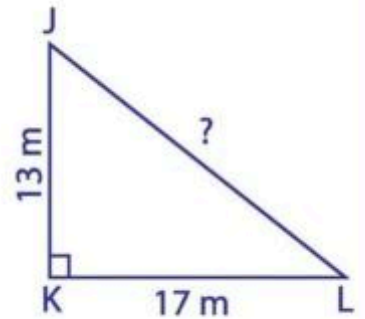
XZ = _____

5)



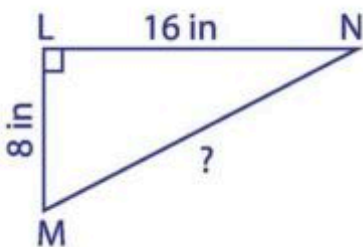
EF = _____

6)



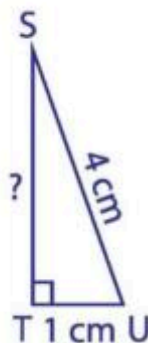
JL = _____

7)



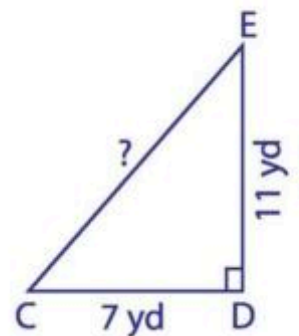
MN = _____

8)



ST = _____

9)



CE = _____