

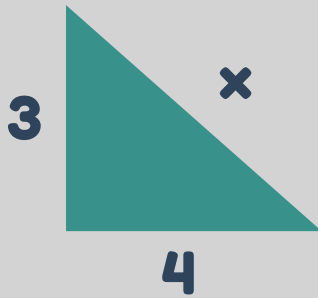
Name:

Date:

# Pythagoras' Theorem

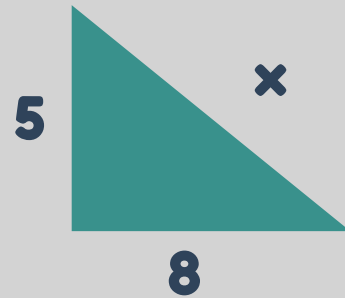
Find the missing side in the right angled triangles.  
Give your answers to 2 d.p.

1



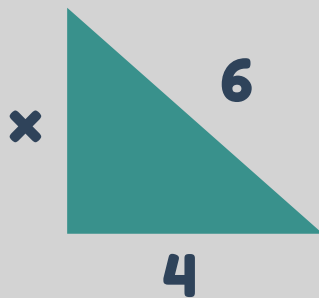
$x =$

2



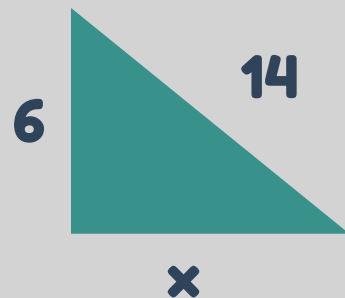
$x =$

3



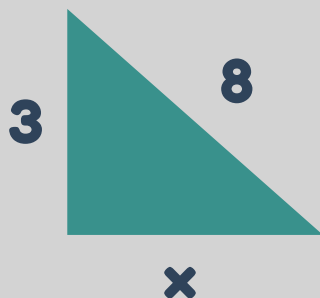
$x =$

4



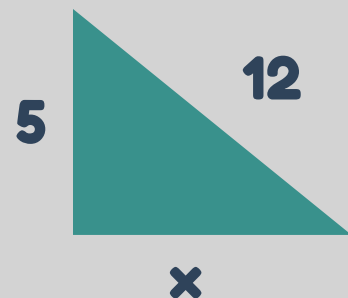
$x =$

5



$x =$

6



$x =$