

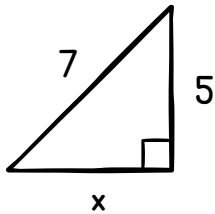
Name: _____

Date: _____

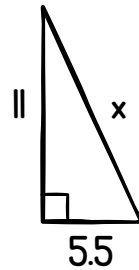
The Pythagorean Theorem

Solve for the missing side of the triangle. Round your answers to the nearest tenth.

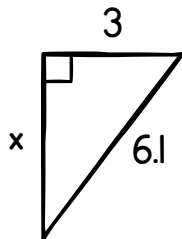
1.



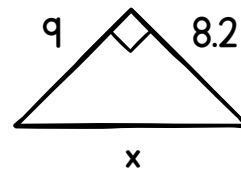
2.



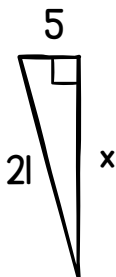
3.



4.



5.



6.

