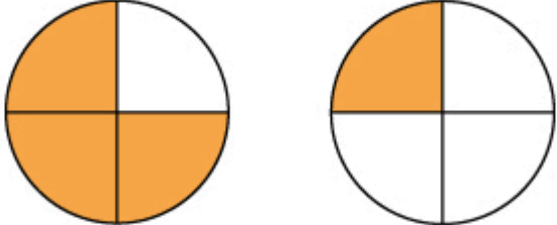
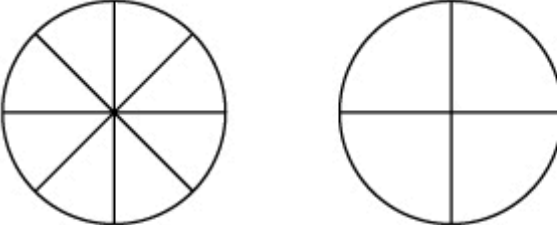
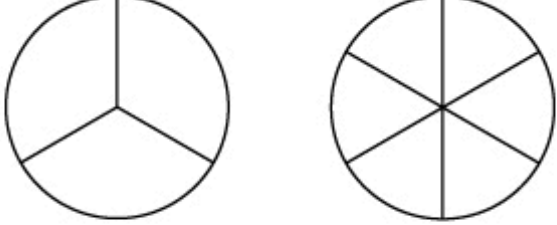
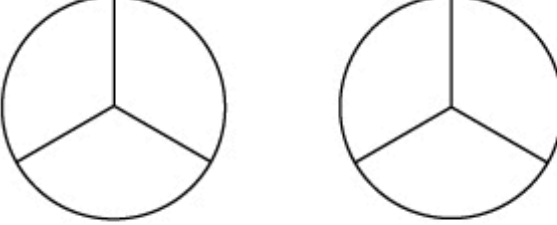
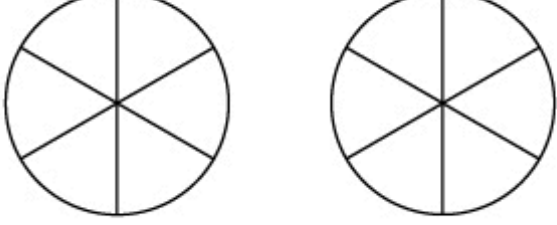
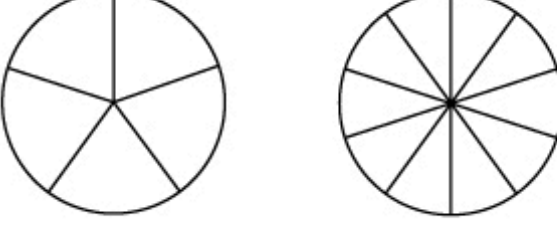
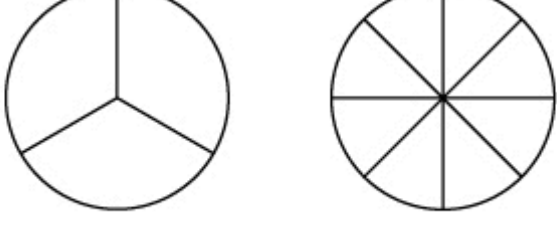
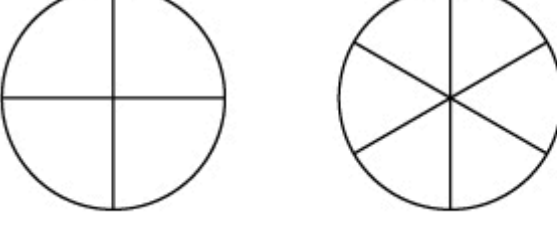


Comparing Fractions Worksheet

<p>1</p>  <p>$\frac{3}{4}$ <input checked="" type="checkbox"/> $\frac{1}{4}$</p>	<p>2</p>  <p>$\frac{2}{8}$ <input type="checkbox"/> $\frac{1}{4}$</p>
<p>3</p>  <p>$\frac{2}{3}$ <input type="checkbox"/> $\frac{2}{6}$</p>	<p>4</p>  <p>$\frac{1}{3}$ <input type="checkbox"/> $\frac{2}{3}$</p>
<p>5</p>  <p>$\frac{5}{6}$ <input type="checkbox"/> $\frac{2}{6}$</p>	<p>6</p>  <p>$\frac{3}{5}$ <input type="checkbox"/> $\frac{6}{10}$</p>
<p>7</p>  <p>$\frac{2}{3}$ <input type="checkbox"/> $\frac{2}{8}$</p>	<p>8</p>  <p>$\frac{1}{4}$ <input type="checkbox"/> $\frac{1}{6}$</p>