



Punnett Square Practice Worksheet


Determine the phenotype for each genotype:

 Black fur (B) is dominant over white fur (b).


- BB _____
- Bb _____
- bb _____

 Tall plants (T) are dominant over short plants (t).

- TT _____
- Tt _____
- tt _____

 Spotted scales (S) are dominant over plain scales (s).

- SS _____
- Ss _____
- ss _____

 Pointed ears (P) are dominant over rounded ears (p).

- PP _____
- Pp _____
- pp _____