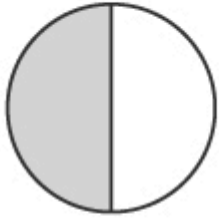
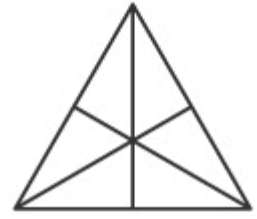
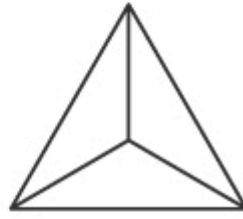
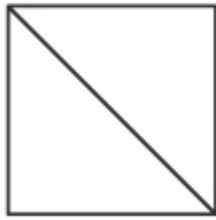





Comparing Fractions by Diagram Worksheet

 $\frac{1}{2}$  $\frac{1}{3}$  $\frac{2}{3}$  $\frac{2}{6}$  $\frac{2}{4}$  $\frac{1}{2}$  $\frac{4}{5}$  $\frac{8}{10}$  $\frac{5}{6}$  $\frac{2}{6}$  $\frac{3}{8}$  $\frac{3}{4}$