

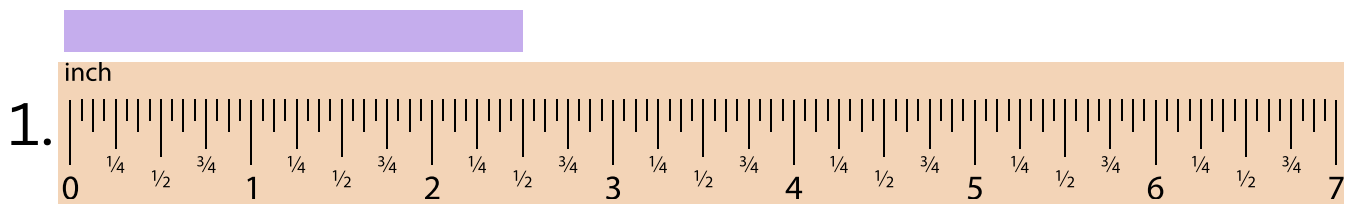
Reading a Tape Measure Worksheet

Name: _____

Date: _____

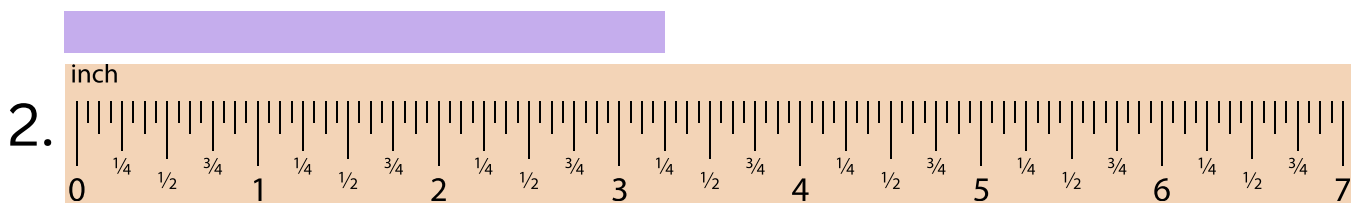
Multiple Choice – Fractions on a Tape Measure

Circle the correct answer based on what the tape measure shows.



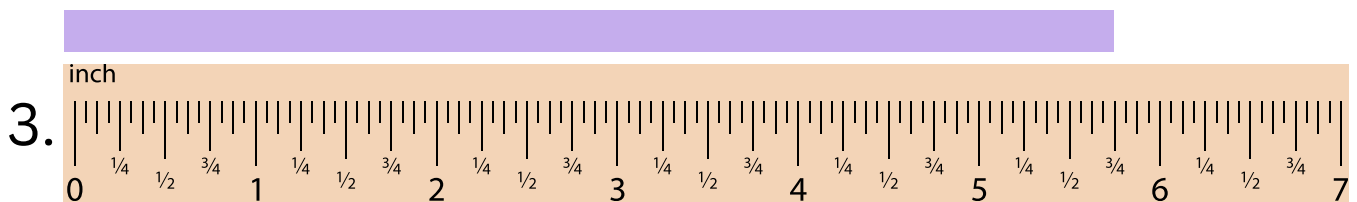
The measurement is:

- A) $2 \frac{1}{4}$ inches
- B) $2 \frac{1}{2}$ inches
- C) $2 \frac{3}{4}$ inches



The measurement is:

- A) $3 \frac{1}{4}$ inches
- B) $3 \frac{1}{2}$ inches
- C) $3 \frac{5}{8}$ inches



The measurement is:

- A) $5 \frac{1}{4}$ inches
- B) $5 \frac{1}{2}$ inches
- C) $5 \frac{3}{4}$ inches