




Shading Equivalent Fractions Worksheet




$$\frac{1}{4} =$$



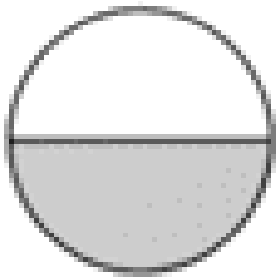
$$\frac{2}{8}$$



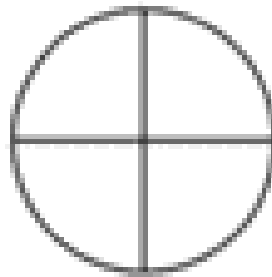
$$\frac{3}{8} =$$



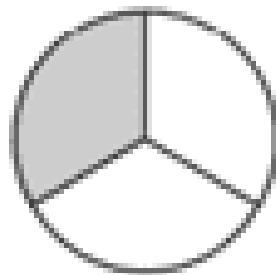
$$\frac{2}{16}$$



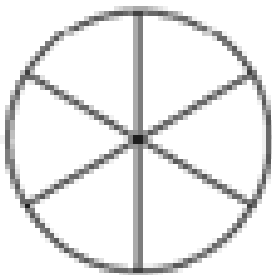
$$\frac{1}{2} =$$




$$\frac{2}{4}$$




$$\frac{1}{3} =$$



$$\frac{2}{6}$$



$$\frac{2}{3} =$$



$$\frac{4}{6}$$